


Visual Subtraction


Name: _____

Date: _____


Cross out the removed objects and count what is left — Subtraction with Pictures (up to 24)



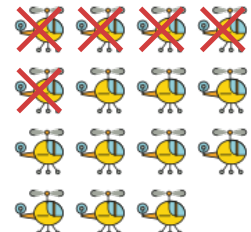
$11 - 8 = \underline{\quad}$




$13 - 7 = \underline{\quad}$



$14 - 8 = \underline{\quad}$




$15 - 5 = \underline{\quad}$



$16 - 3 = \underline{\quad}$




$16 - 7 = \underline{\quad}$




$17 - 5 = \underline{\quad}$



$20 - 7 = \underline{\quad}$



$21 - 6 = \underline{\quad}$



$22 - 4 = \underline{\quad}$



$22 - 5 = \underline{\quad}$



$23 - 7 = \underline{\quad}$