


Visual Subtraction

Name: _____

Date: _____

Cross out the removed objects and count what is left — Subtraction with Pictures (up to 24)



$8 - 4 = \underline{\quad}$




$9 - 6 = \underline{\quad}$



$12 - 3 = \underline{\quad}$



$12 - 8 = \underline{\quad}$



$14 - 3 = \underline{\quad}$




$14 - 4 = \underline{\quad}$




$14 - 6 = \underline{\quad}$




$14 - 8 = \underline{\quad}$



$15 - 8 = \underline{\quad}$



$16 - 3 = \underline{\quad}$



$16 - 6 = \underline{\quad}$



$20 - 7 = \underline{\quad}$