


Visual Subtraction


Name: _____

Date: _____


Cross out the removed objects and count what is left — Subtraction with Shapes (up to 36)



$21 - 9 = \underline{\quad}$




$21 - 10 = \underline{\quad}$




$22 - 7 = \underline{\quad}$




$22 - 8 = \underline{\quad}$




$27 - 5 = \underline{\quad}$



$28 - 5 = \underline{\quad}$



$29 - 5 = \underline{\quad}$



$33 - 5 = \underline{\quad}$



$36 - 7 = \underline{\quad}$