


Visual Subtraction


Name: _____

Date: _____


Cross out the removed objects and count what is left — Subtraction with Shapes (up to 36)




$16 - 4 = \underline{\quad}$




$16 - 8 = \underline{\quad}$




$19 - 10 = \underline{\quad}$




$24 - 6 = \underline{\quad}$




$25 - 6 = \underline{\quad}$




$25 - 8 = \underline{\quad}$



$26 - 5 = \underline{\quad}$



$31 - 9 = \underline{\quad}$



$32 - 9 = \underline{\quad}$