


Visual Subtraction


Name: _____

Date: _____

Cross out the removed objects and count what is left — Subtraction with Shapes (up to 36)




$12 - 8 = \underline{\quad}$




$16 - 9 = \underline{\quad}$




$19 - 8 = \underline{\quad}$




$25 - 4 = \underline{\quad}$




$25 - 10 = \underline{\quad}$




$26 - 10 = \underline{\quad}$



$27 - 5 = \underline{\quad}$



$33 - 4 = \underline{\quad}$



$35 - 10 = \underline{\quad}$

