

# Visual Subtraction


Name: \_\_\_\_\_

Date: \_\_\_\_\_


Cross out the removed objects and count what is left — Subtraction with Shapes (up to 36)




$12 - 10 = \underline{\quad}$




$15 - 6 = \underline{\quad}$




$27 - 5 = \underline{\quad}$




$28 - 7 = \underline{\quad}$




$29 - 5 = \underline{\quad}$




$32 - 6 = \underline{\quad}$



$34 - 4 = \underline{\quad}$



$34 - 8 = \underline{\quad}$



$35 - 5 = \underline{\quad}$

