


Visual Subtraction


Name: _____

Date: _____


Cross out the removed objects and count what is left — Subtraction with Shapes (up to 50)




$25 - 5 = \underline{\quad}$




$25 - 12 = \underline{\quad}$




$28 - 12 = \underline{\quad}$




$35 - 9 = \underline{\quad}$




$36 - 8 = \underline{\quad}$




$40 - 7 = \underline{\quad}$



$44 - 8 = \underline{\quad}$



$44 - 10 = \underline{\quad}$



$49 - 8 = \underline{\quad}$