


Visual Subtraction


Name: _____

Date: _____


Cross out the removed objects and count what is left — Subtraction with Shapes (up to 50)



$20 - 6 = \underline{\quad}$



$20 - 7 = \underline{\quad}$




$24 - 12 = \underline{\quad}$



$31 - 12 = \underline{\quad}$




$36 - 10 = \underline{\quad}$




$40 - 10 = \underline{\quad}$



$41 - 11 = \underline{\quad}$



$46 - 6 = \underline{\quad}$



$50 - 10 = \underline{\quad}$

