


# Visual Subtraction


Name: \_\_\_\_\_

Date: \_\_\_\_\_


Cross out the removed objects and count what is left — Subtraction with Shapes (up to 50)




$24 - 12 = \underline{\quad}$




$25 - 6 = \underline{\quad}$




$30 - 9 = \underline{\quad}$




$32 - 9 = \underline{\quad}$




$36 - 9 = \underline{\quad}$




$37 - 6 = \underline{\quad}$



$37 - 7 = \underline{\quad}$



$41 - 8 = \underline{\quad}$



$43 - 6 = \underline{\quad}$

