


Visual Subtraction


Name: _____

Date: _____


Cross out the removed objects and count what is left — Subtraction with Shapes (up to 50)




$20 - 11 = \underline{\quad}$




$23 - 7 = \underline{\quad}$




$33 - 7 = \underline{\quad}$




$34 - 5 = \underline{\quad}$



$34 - 6 = \underline{\quad}$




$35 - 11 = \underline{\quad}$



$41 - 5 = \underline{\quad}$



$41 - 7 = \underline{\quad}$



$48 - 10 = \underline{\quad}$