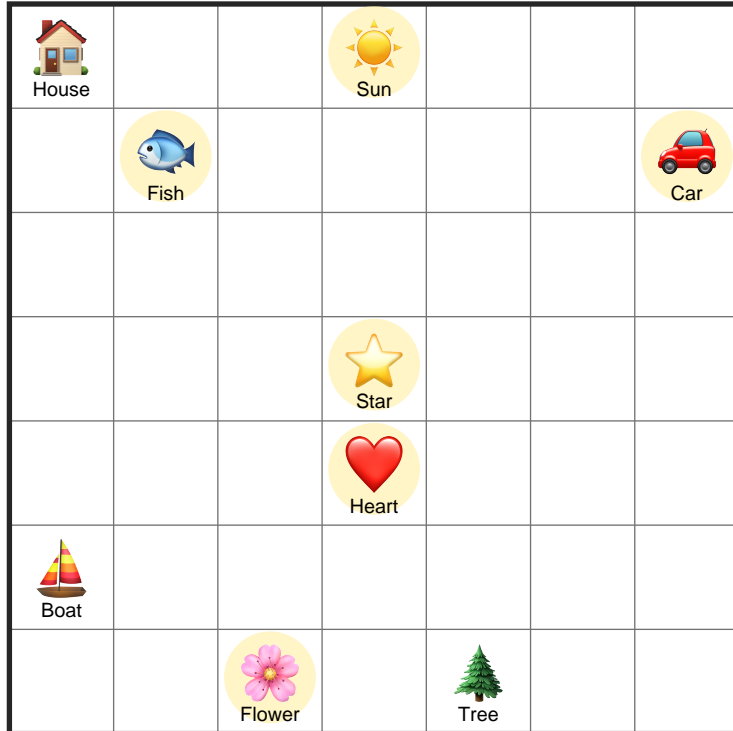


Compass Directions

Name: _____

Date: _____

Look at the map and use the compass rose to answer. — Check the Right Answer



Direction Bank

- North
- South
- East
- West
- North-East
- North-West
- South-East
- South-West

1. What is to the South-West of the Star? Tick ✓ the correct one(s):



2. What is to the South-West of the Car? Tick ✓ the correct one(s):



3. What is to the North-West of the Flower? Tick ✓ the correct one(s):



4. What is to the South-East of the Sun? Tick ✓ the correct one(s):



5. What is to the North-West of the Heart? Tick ✓ the correct one(s):










6. What is to the South-East of the Fish? Tick ✓ the correct one(s):







Answer Key

1. SW of Star  

2. SW of Car     

3. NW of Flower   

4. SE of Sun  

5. NW of Heart  

6. SE of Fish    