


Compass Directions

Name: _____

Date: _____

Look at the map and use the compass rose to answer. — Check All That Apply





Direction Bank

- North
- South
- East
- West
- North-East
- North-West
- South-East
- South-West

1. What is to the West of the Apple? Tick ✓ the correct one(s):
2. What is to the North of the Boat? Tick ✓ the correct one(s):
3. What is to the South-West of the Sun? Tick ✓ the correct one(s):
4. What is to the North-East of the Star? Tick ✓ the correct one(s):
5. What is to the North-East of the Tree? Tick ✓ the correct one(s):
6. What is to the East of the Heart? Tick ✓ the correct one(s):

Answer Key

1. W of Apple   

2. N of Boat  

3. SW of Sun       

4. NE of Star  

5. NE of Tree   

6. E of Heart 